

Math Intervention

Kindergarten



TANYA YERO

Math

110 PAGES OF
INTERVENTION
RESOURCES!

Measurement
and Data
Standards

procedural &
Conceptual
Understanding
Assessed

»» RESOURCE pack ««

THANK YOU FOR YOUR PURCHASE!



TANYA YERO



CONNECT WITH ME!



TERMS OF USE

Copyright © Tanya Yero. All rights reserved by creator. This product is to be used by the original downloader only. Copying for more than one teacher, classroom, team, grade level, department, school, or school system is prohibited. This product may not be distributed or displayed digitally for public view. Failure to comply is a copyright infringement and a violation of the Digital Millennium Copyright Act (DMCA). Clipart and elements found in this PDF are copyrighted and cannot be extracted and used outside of this file without permission or license. Please contact me if you wish to be granted special authorizations.

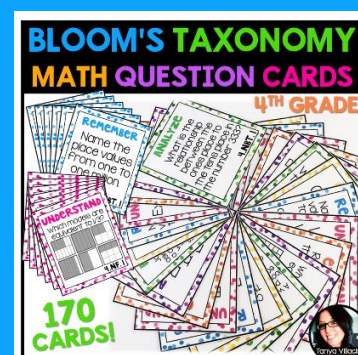

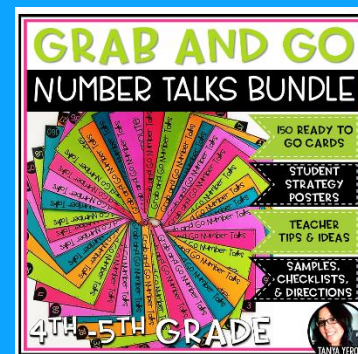
YOU MAY:

- Use this item for personal use. The purchase of this product is good for one classroom.
- Review, pin, and/or provide feedback of this product online. Please include a link.
- Purchase additional licenses or share store link with others and/or online.

YOU MAY NOT:

- Make copies, email, and/or share this resource
- Post this resource or any portion of this product online.
- Share, sell, or claim this product as your own.
- Use any part of this product when creating your own resources for sale online.

CHECK OUT MY OTHER PRODUCTS!



How to use the materials Included

Pretest and Item Analysis sheet is designed to pinpoint exactly where your students' needs are.

Name: _____ Date: _____
Measurement & Data Pre-Test K.MD.1 - K.MD.3

1.) Color the things that are shorter than the crayon.

2.) Draw something that is taller than the flower.

3.)

Name: _____ Date: _____
Measurement & Data Pre-Test K.MD.1 - K.MD.3

4.) Circle the set of items that will be heavier.

5.) Circle the stick that is longer. Complete the sentence.

_____ blocks are longer than _____ s.

Name: _____ Date: _____
Measurement & Data Pre-Test K.MD.1 - K.MD.3

7.) Draw more to make the scale balance. How many more did you draw

8.) Draw a line to match each item with category.

Animals

School supplies

9.) Circle sets of 2. Cross out sets of 3. Draw a box around sets of 4.

Name: _____ Date: _____
Measurement & Data Pre-Test K.MD.1 - K.MD.3

10.) Draw a line to match each set with its category. Write how many are in each category.

Set of 1

Set of 2

Set of 3

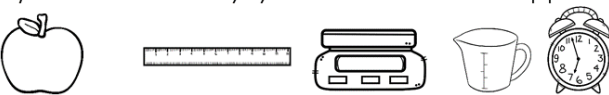
Set of 4

Item Analysis Data Sheet Per Student
Measurement and Data Pre-Test K.MD.1 - K.MD.3

Student Name: _____

Q's	Standard	Procedural Understanding	Conceptual Understanding	(M) Missed
#1	K.MD.1	X		
#2	K.MD.1		X	
#3	K.MD.1		X	
#4	K.MD.2	X		
#5	K.MD.2		X	
#6	K.MD.1		X	
#7	K.MD.2		X	
#8	K.MD.3	X		
#9	K.MD.3	X		
#10	K.MD.3		X	

Printables are included for reviewing procedural and conceptual understanding for each standard/topic.



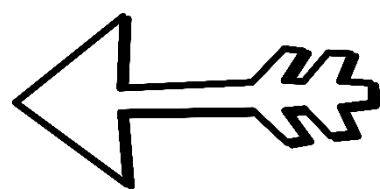
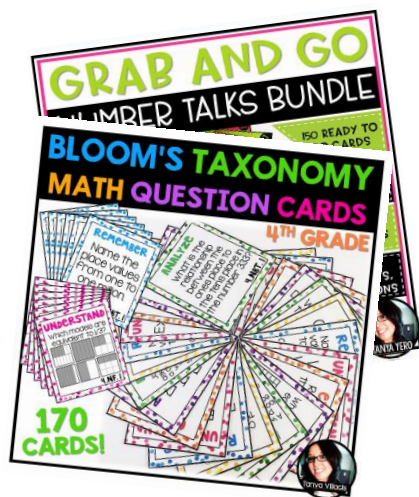
TANYA YERO Teaching

WHERE *creativity* MEETS PRACTICALITY



THANK You

for downloading this product!



Follow Me

on TpT for notifications on my latest products and freebies!

OTHER PLACES TO FIND ME:



Copyright © Tanya Yero. All rights reserved by creator. This product is to be used by the original downloader only. Copying for more than one teacher, classroom, team, grade level, department, school, or school system is prohibited. This product may not be distributed or displayed digitally for public view. Failure to comply is a copyright infringement and a violation of the Digital Millennium Copyright Act (DMCA). Clipart and elements found in this PDF are copyrighted and cannot be extracted and used outside of this file without permission or license. Please contact me if you wish to be granted special authorizations.